



**K.P.C. PUBLIC SCHOOL, KHARGHAR**  
**ASSESSMENT V – 2022-23**


**GRADE : I**  
**SUB : MATHS**  
**NAME : \_\_\_\_\_**

**MARKS : 50**  
**TIME : 2 hours**

**Q. 1] Fill in the blanks :** **[6]**

- 1) Coins are made of \_\_\_\_\_  
a) paper                      b) metal                      c) both
- 2) 1 hour = \_\_\_\_\_ minutes  
a) 600                      b) 60                      c) 6
- 3) When we multiply two numbers, the answer we get is called \_\_\_\_\_  
a) sum                      b) difference                      c) product
- 4) A face of the clock is called the \_\_\_\_\_  
a) dial                      b) minute hand                      c) hour hand
- 5) The symbol for Indian rupees is \_\_\_\_\_  
a) ₹                      b) \$                      c) €
- 6) Skip counting of 4 will leave \_\_\_\_\_ numbers each time  
a) 5                      b) 4                      c) 3

**Q. 2] Match the following :** **[6]**

Column 'A'	Answer	Column 'B'
A day		₹ 13
6 x 3		365 days
Notes		16
A year		3+3+3+3+3+3
2 x 8		24 hours
		paper

**Q. 3] Do as directed :** **[6]**

**1) What is the Time ?**



\_\_\_\_\_

\_\_\_\_\_

\_\_\_\_\_

2) Count and write the amount in the box :








Q.4] Solve the following :


[ 8 ]

1) Complete the skip counting given below :


1) 10 \_\_\_\_\_ 30 \_\_\_\_\_ 60 \_\_\_\_\_ 80

2) 18 20 \_\_\_\_\_ 24 \_\_\_\_\_ 28 \_\_\_\_\_

2) Draw the hands to show the given time :



7 o'clock



3 o'clock

Q.5] Solve the following :

[ 12 ]

1) Complete the following :

a)	_____	3 times 5	3 x 5	_____
b)	1 + 1 + 1 + 1 + 1 + 1	_____ times _____	___ x ___	_____
c)	_____	2 times 4	2 x 4	_____

2) Rohan can eat 3 bananas in a day. How many bananas can he eat in 6 days ?

Ans : \_\_\_\_\_

---



---

3) There are 5 pens in a pack. How many pens in 4 packs ?


Ans : \_\_\_\_\_

---



---

4) Look at the picture and write the answer :

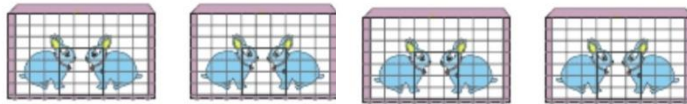


- a) At what time did Azhar wake up ? Ans : \_\_\_\_\_
- b) What was Azhar doing at 4 o'clock ? Ans : \_\_\_\_\_
- c) At what time Azhar attended his friend's birthday party ? Ans : \_\_\_\_\_
- d) At what time did Azhar eat his dinner ? Ans : \_\_\_\_\_

Q.6] Solve the following :

[ 12 ]

1) Look at the picture and write the answers :



- a) Number of cages : \_\_\_\_\_
- b) Number of rabbits in each cage : \_\_\_\_\_
- c) Repeated addition sentence : \_\_\_\_\_
- d) Multiplication sentence : \_\_\_\_\_

2) Read the information given below and answer the questions :

Flavor	No. of people
Vanilla	
Chocolate	
Strawberry	
Pineapple	
Peach	

- 1) Which ice-cream flavour is most popular ? Ans : \_\_\_\_\_
- 2) Which ice-cream flavour is least popular ? Ans : \_\_\_\_\_
- 3) How many people like Vanilla as their favourite ice-cream flavour? Ans : \_\_\_\_\_

3) Given below are some objects with their price.



- 1) The price of eraser and pencil is \_\_\_\_\_
- 2) The price of book and sharpner is \_\_\_\_\_
- 3) The price of pencil and book is \_\_\_\_\_

4) Look at the calendar and answer the questions below :

February-2011						
SUN	MON	TUE	WED	THU	FRI	SAT
		1	2	3	4	5
6	7	8	9	10	11	12
13	14	15	16	17	18	19
20	21	22	23	24	25	26
27	28					

- a) What is the name of this month's calendar ?
- b) How many days are in this month ?
- c) How many Monday's are in this month ?

Ans : \_\_\_\_\_

Ans : \_\_\_\_\_

Ans : \_\_\_\_\_